

Tell me everything you can Y1 and Y2

1 more  
1 less

Draw it!



Numbers  
greater than  
15  
 $15 > ?$

Numbers smaller than 15  
 $? < 15$

15

$15 = ?$  Tens and  $?$  Ones

Make 15 using anything  
you like.  
How many ways can you  
do this?

0 to 20 Number Line



2,4,6,8,10..  
5,10,  
10,  
Will I say 15? Why /why  
not?

15

Can you make  
15 using 3  
numbers?

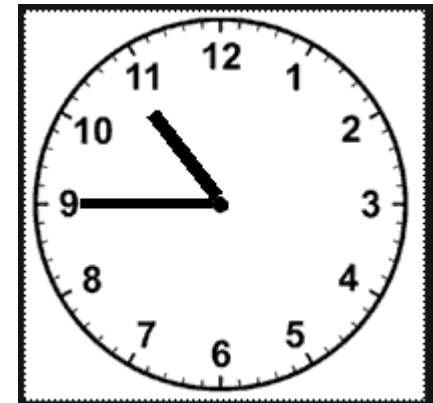
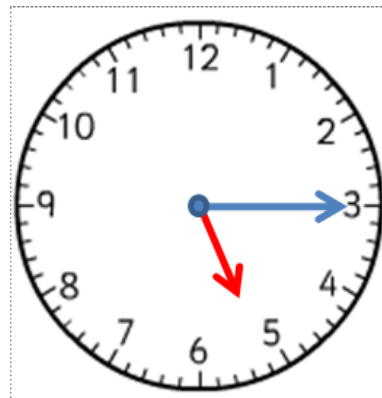
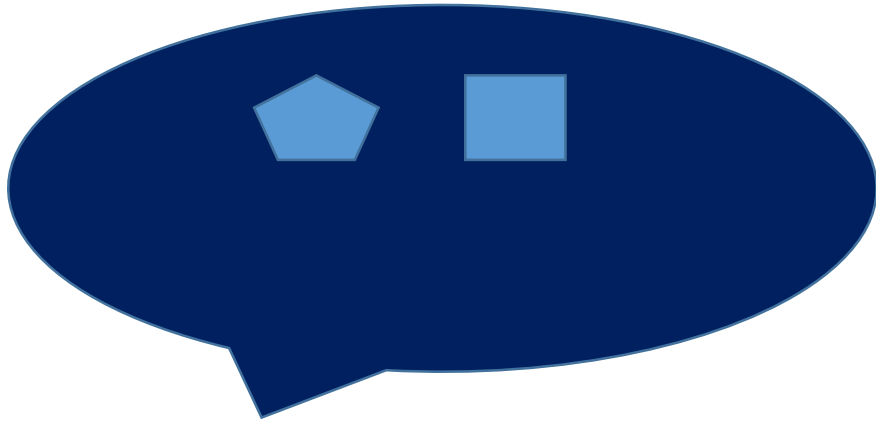
$15 = 15 + 0$   
 $15 = 14 +$   
 $15 = 13 +$

Use 15 matchsticks how  
can I share them into  
two groups?  
Can you share the  
matchsticks equally?  
What if there were 3  
people?

How many  
triangles can  
you make with  
15  
matchsticks?

15

Make 15p using just silver  
coins.  
How many ways?



What's the time?

Draw a line that is 15cm long.  
It doesn't have to be a straight line.

What can you do in 15 seconds?

---

# 15

What can you find that weighs 15?

15 days = ? weeks

What can you find that has a length of 15 ?